



MINISTRY OF EDUCATION, SINGAPORE
in collaboration with
CAMBRIDGE ASSESSMENT INTERNATIONAL EDUCATION
General Certificate of Education Ordinary Level

HUMANITIES

Paper 2 Geography
SPECIMEN INSERT

2260/02

For examination from 2024

1 hour 45 minutes

READ THESE INSTRUCTIONS FIRST

This Insert contains additional resources referred to in the questions.

This document consists of **7** printed pages and **1** blank page.



Singapore Examinations and Assessment Board



Cambridge Assessment
International Education

Fig. 1.1 for Question 1

Pelicans crossing a road in London, UK



Fig. 1.2 for Question 1
Two precincts in the Clementi Neighbourhood, Singapore

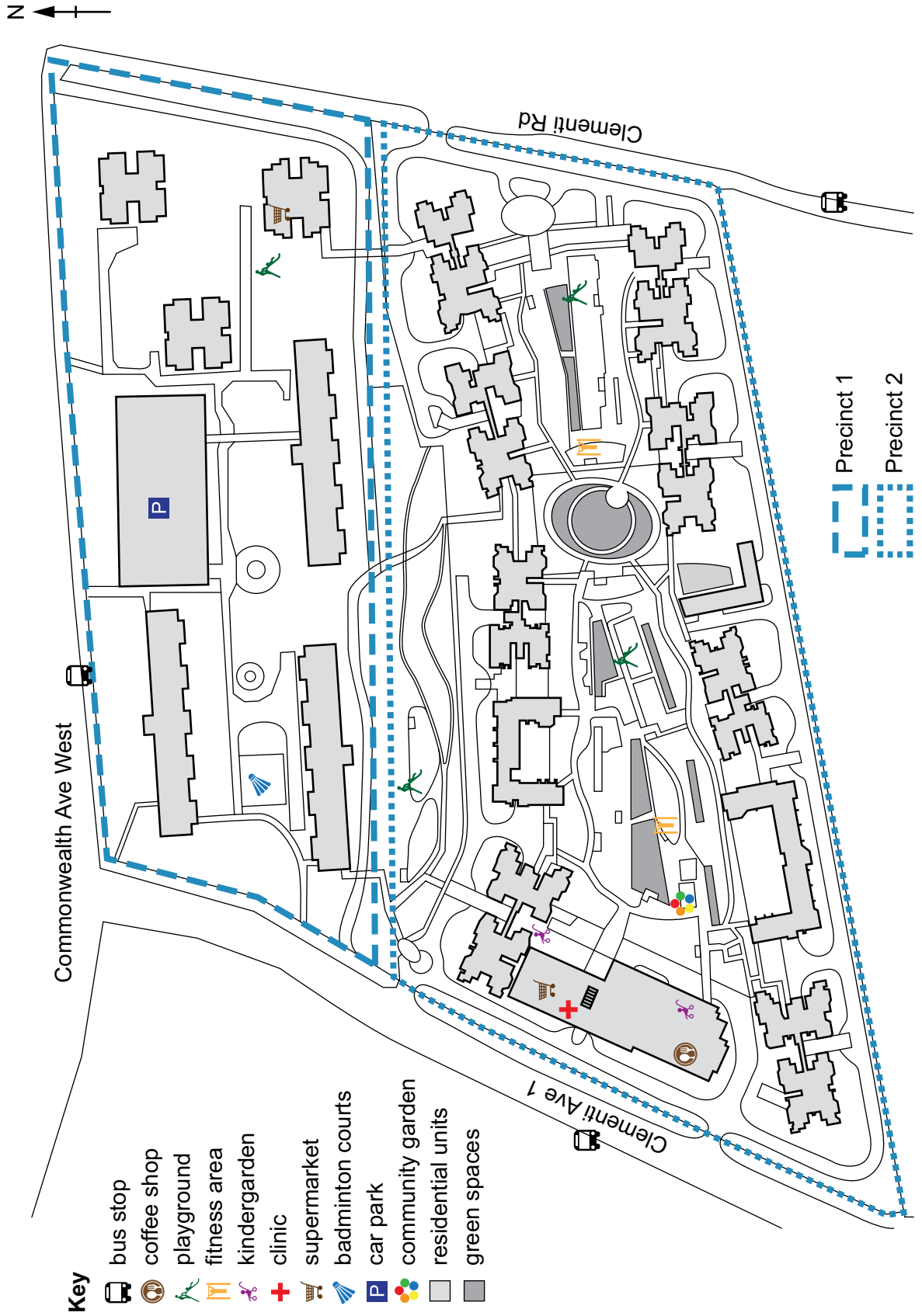


Fig. 1.3 for Question 1

A view of part of a city



Fig. 2.2 for Question 2

A beach in Boracay, the Philippines



Fig. 3.1 for Question 3

The degree to which the Earth's surface temperatures in 2020 have changed relative to the average temperature between 1951 and 1980

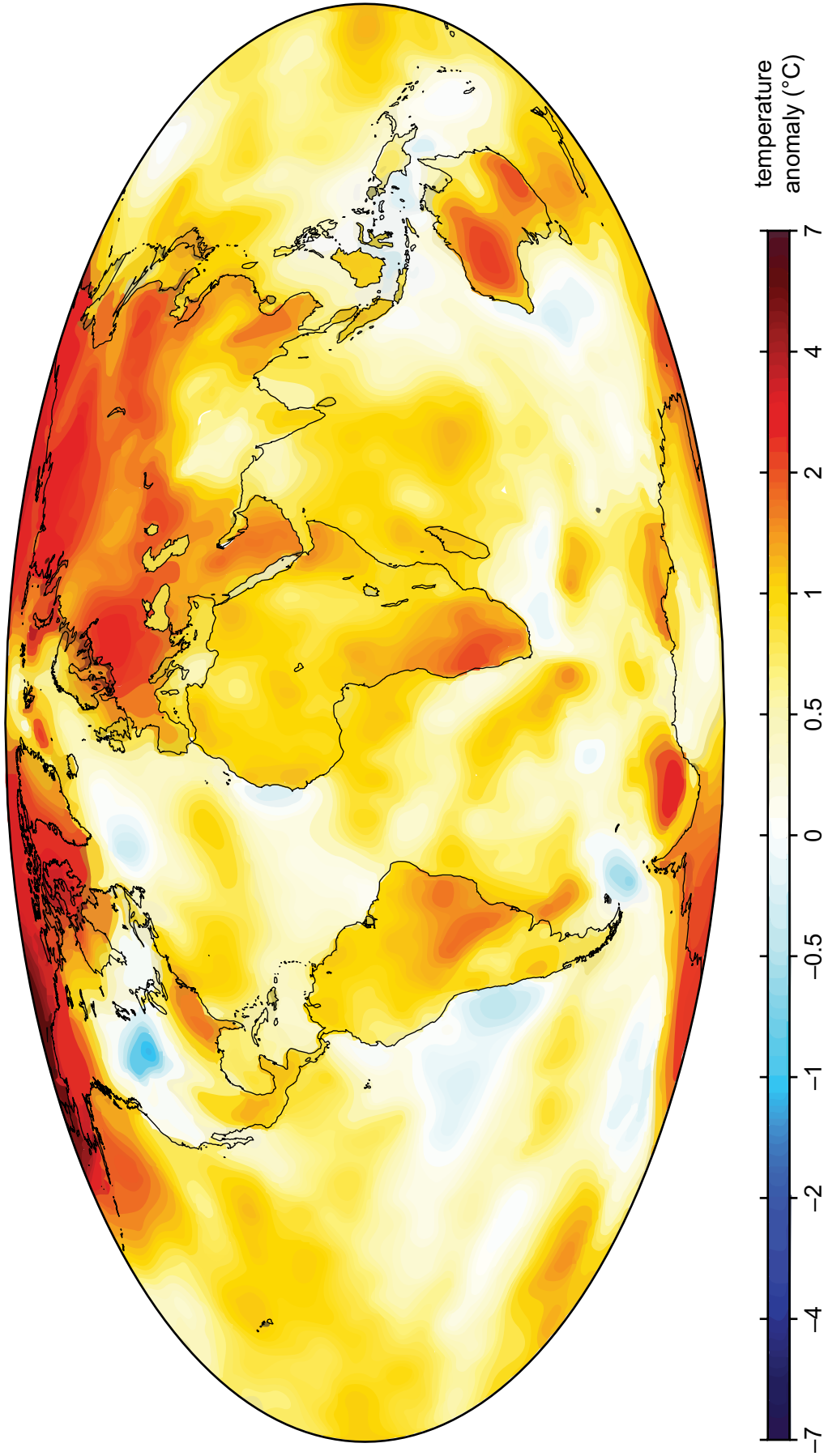
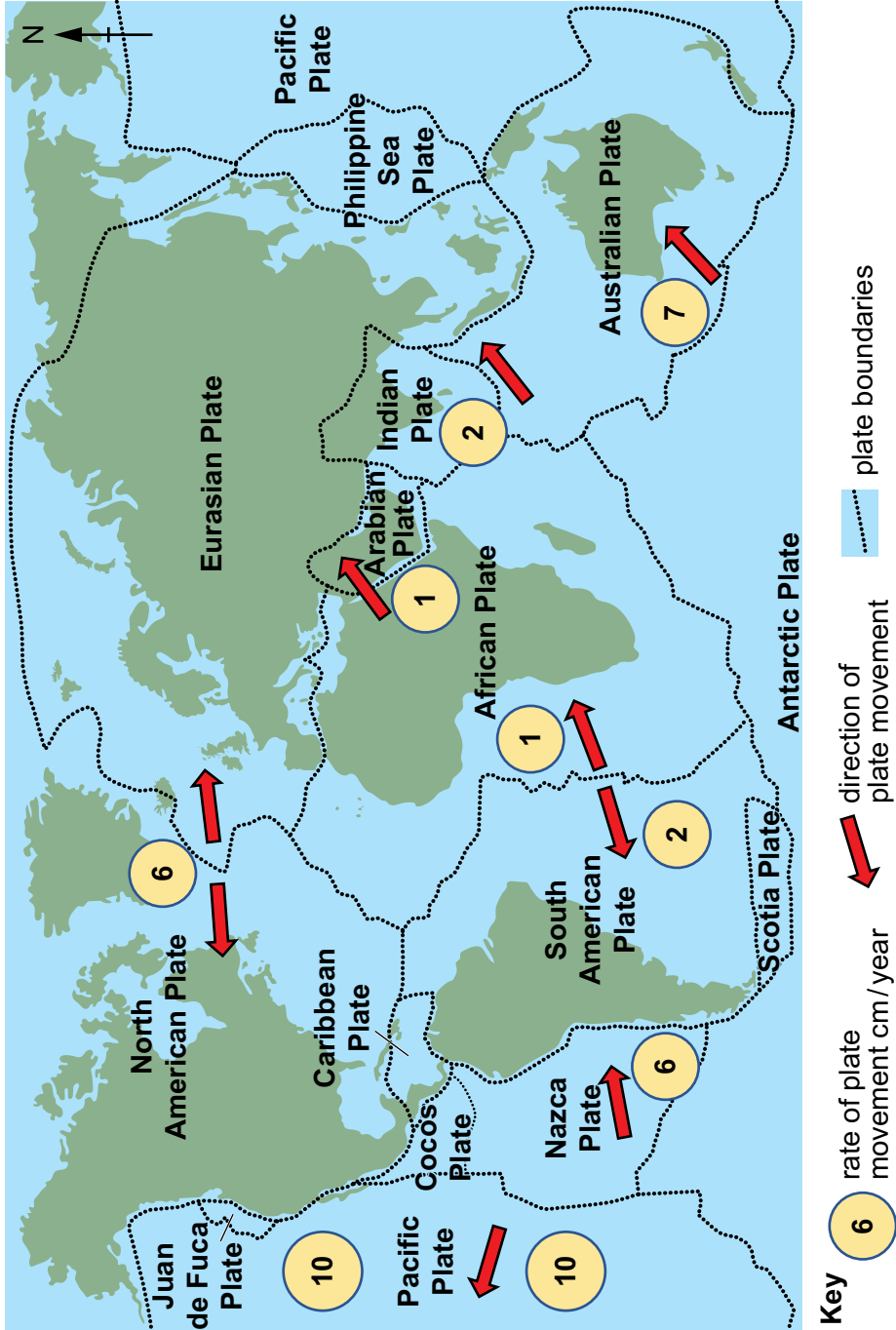


Fig. 4.1 for Question 4
Tectonic plate boundaries and the rate and direction of plate movement



BLANK PAGE

Copyright Acknowledgements:

- Question 1 Fig. 1.1 © ref: 2C2TCWH; Avpics/Alamy Stock Photo; *Westminster, London, UK. 18th Jun, 2020. The pelicans that live in St. James's Park decided to take a walk across The Mall*; www.alamy.com
- Question 1 Fig. 1.2 © Courtesy of Zdravko Trivic. "Figure 4. Neighbourhood 2: Clementi—spatial layout and amenities (source: by author)" was first published in Trivic, Zdravko. (2021). *A Study of Older Adults' Perception of High-Density Housing Neighbourhoods in Singapore: Multi-Sensory Perspective. International Journal of Environmental Research and Public Health, 18(13): 6880*. DOI: <https://doi.org/10.3390/ijerph18136880>. The work was published by the MDPI, an open access publisher, based in Basel, Switzerland. This image is freely available at: <https://www.mdpi.com/1660-4601/18/13/6880>. The file is licenced under the Creative Commons Attribution 4.0 International (CC BY 4.0) license (<https://creativecommons.org/licenses/by/4.0/>; <https://creativecommons.org/licenses/by/4.0/legalcode>).
- Question 1 Fig. 1.3 © ref: PPPDRH; Anna Ivanova/Alamy Stock Photo; *Poor environment in the city*; www.alamy.com
- Question 2 Table 2.1 © Data from *International visitor arrivals in Kenya from 2010 to 2020*; Statista; <https://www.statista.com/statistics/1140047/international-visitor-arrivals-in-kenya/>
- Question 2 Fig. 2.1 © Data from *International visitor arrivals in Kenya from 2010 to 2020*; Statista; <https://www.statista.com/statistics/1140047/international-visitor-arrivals-in-kenya/>
- Question 2 Fig. 2.2 © Johnny Lieu; *Philippines temporarily closes popular holiday island to tourists due to pollution*; <https://mashable.com/article/boracay-philippines-garbage-closure>; 5 April 2018
- Question 2 Fig. 2.3 © *Belief on who should be responsible for ensuring sustainable tourism at a destination (%)*; BVA BDRC; <https://www.bva-bdrc.com/opinions/cares-sustainable-tourism/>
- Question 3 Fig. 3.1 © Map from Berkeley Earth; <http://berkeleyearth.org/2019-temperatures/>
- Question 3 Fig. 3.2 © *Perceptions of the Causes of Global Warming*; <https://climatecommunication.yale.edu/visualizations-data/perceptions-of-the-causes-of-global-warming/>
- Question 4 Fig. 4.2 © EM-DAT, CRED / UCLouvain, Brussels, Belgium – www.emdat.be

Permission to reproduce items where third-party owned material protected by copyright is included has been sought and cleared where possible. Every reasonable effort has been made by the publisher (UCLES) to trace copyright holders, but if any items requiring clearance have unwittingly been included, the publisher will be pleased to make amends at the earliest possible opportunity.

Cambridge Assessment International Education is part of Cambridge Assessment. Cambridge Assessment is the brand name of the University of Cambridge Local Examinations Syndicate (UCLES), which is a department of the University of Cambridge.